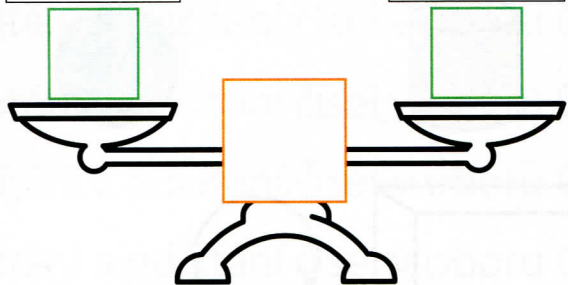




Vypočítej příklady na obou ramenech vah, napiš vždy výsledek a také doplň  $>$ ,  $<$ ,  $=$ .

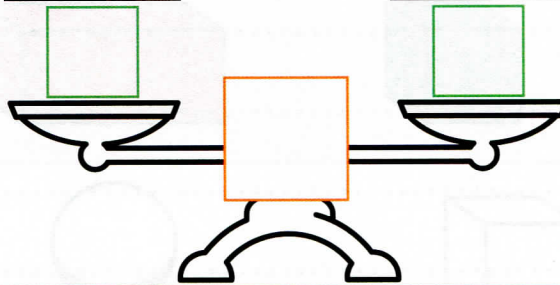
$9+7$

$18-3$



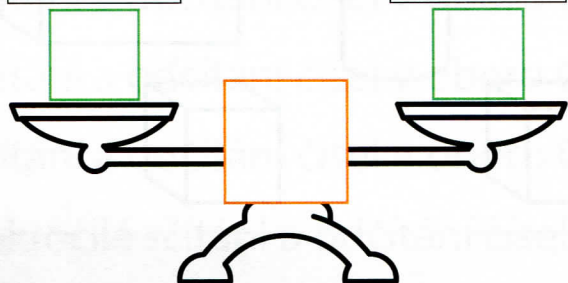
$10+6$

$7+8$



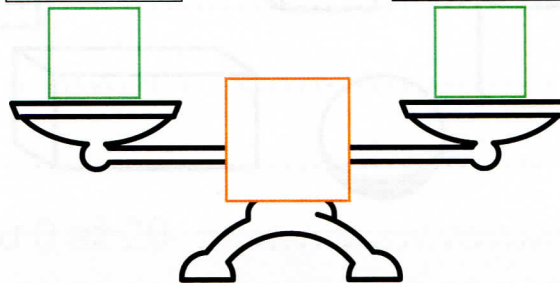
$17-6$

$18-5$



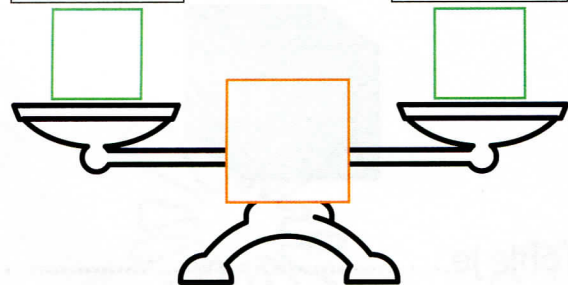
$15+2$

$20-4$



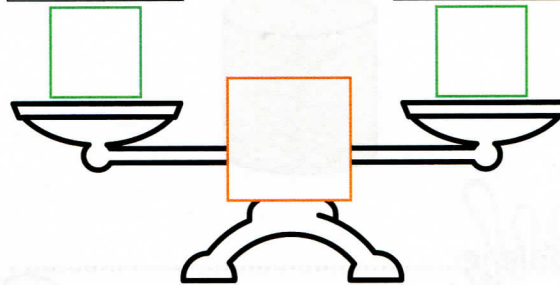
$9+3$

$14-2$



$5+6$

$10-1$



Vypočítej příklady. Výsledky porovnej a doplň znaménka  $>$ ,  $<$  a  $=$ .

$8-2$

$11-4$

$6-3$

$1+1$

$20-3$

$9+5$

$5+5$

$12-2$

$6+0$

$8-2$

$6+6$

$4+5$

$19-6$

$7+7$

$15-4$

$17-5$

$17-5$

$4+8$